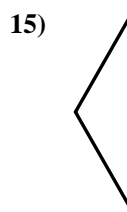
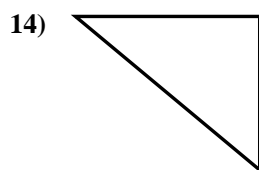
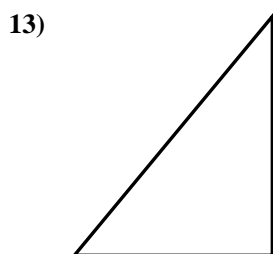
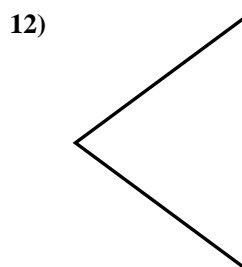
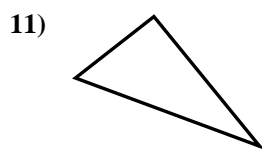
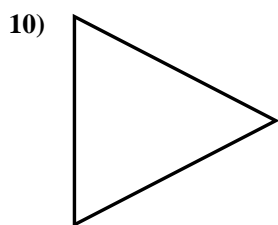

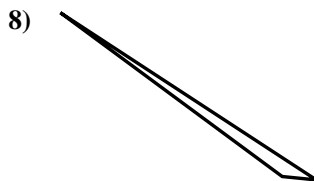
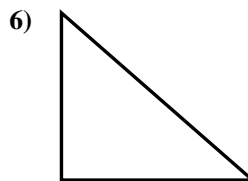
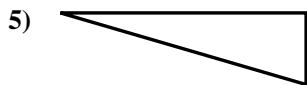

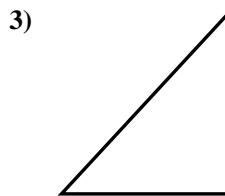
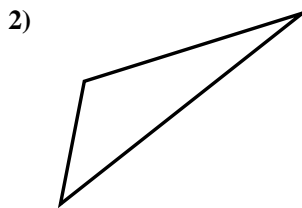





Determine if the triangle shown is a right triangle (yes) or not (no).

Answers

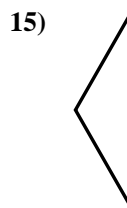
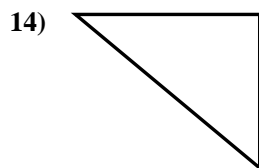
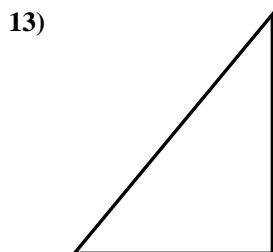
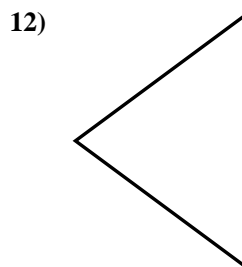
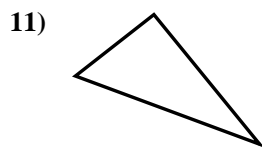
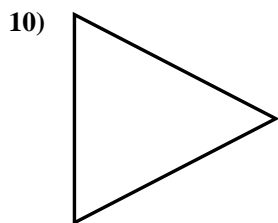

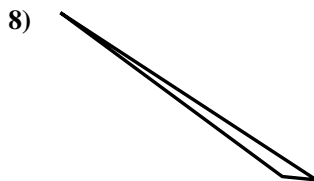
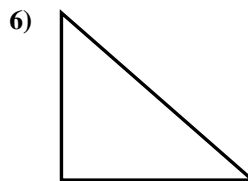
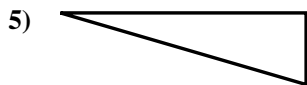

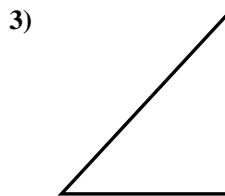
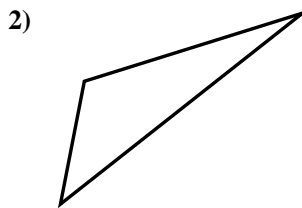



- 1. _____
- 2. _____
- 3. _____
- 4. _____
- 5. _____
- 6. _____
- 7. _____
- 8. _____
- 9. _____
- 10. _____
- 11. _____
- 12. _____
- 13. _____
- 14. _____
- 15. _____



Determine if the triangle shown is a right triangle (yes) or not (no).

Answers



1. no

2. no

3. yes

4. no

5. yes

6. yes

7. yes

8. no

9. no

10. no

11. yes

12. no

13. yes

14. yes

15. no